

Mathematics Olympiad

Downloadable Mock

Level 1

General Instructions:

1. Please note it is a Mock Paper. The questions might differ in the final exam.
2. The exam should be answered using pencil on the question paper itself.
3. Please read the questions carefully before answering them.

Student Details:

Name _____

Std _____

Q1. Circle all the addition facts for 9

4+5	5+3	9+1	8+2	7+2	8+0
-----	-----	-----	-----	-----	-----

Q2. Circle all the subtraction facts for 6

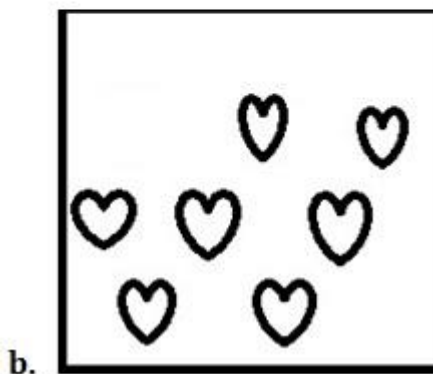

8 - 5	9 - 1	8 - 3	7 - 2	6 - 0	10 - 4
-------	-------	-------	-------	-------	--------

Q3. Circle the smallest and underline the largest number in each row.

a. 6, 7, 57, 32, 3, 99

b. 4, 23, 30, 1, 91

Q4. Count and write the number and its name.



**Q5. For the numbers given below write the digits in the correct boxes.
One has been done for you.**

87, 45

Tens	Ones

Q6. Solve the following.

$$\begin{array}{r} 22 \\ + 55 \\ \hline \end{array}$$

Q7. Add 3 to the given number and write it to the right and subtract 3 from the given number and write it to the left.

	6	
--	---	--

Q8. Solve the below

$4 \times 5 =$	
----------------	--

Q9. Answer the following.

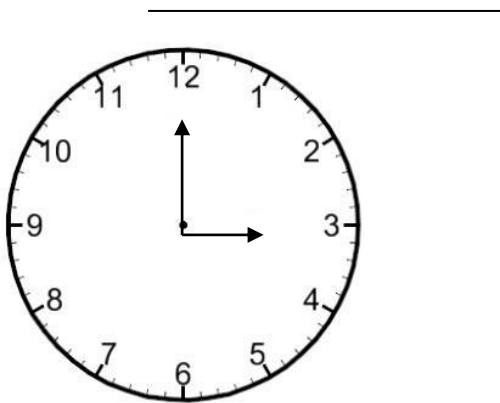
1. The sixth month of the year is - _____

2.

\triangle	\square	\square	\triangle	\square	\triangle	\triangle
-------------	-----------	-----------	-------------	-----------	-------------	-------------

 Which is less \square or \triangle ? _____

Q10. Write what time it is on the clock.



Q11. Fill in the blanks with the appropriate sign. "<" or ">"

3

--

 9

7

--

 4

Q12. Solve the below given word problem.

In my house I have six library books. My friend has five library books in her house. How many library books do we have together in our houses?

Q13.

A. Fill in the blanks to complete the number pattern

1, _____, 5, _____, 9

B) Show the numbers on the abacus and say if it is odd or even.

14

